

SANSKAR SCHOOL
GRADE- 4
Assignment-16
Date: Thursday, 9th December 2021

ENGLISH:

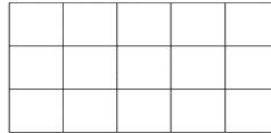
Reading and explanation of **pages 81 and 82** of **Story-9 CROW BOY**

Creative Writing- Write a paragraph on the Topic '**My Best Friend**'. (50 words)

MATHS:

AREA OF RECTANGLES

To find the area of a rectangle, simply count the number of cm squares inside the rectangle. The area of the shape below is $5 \times 3 = 15$ square cm.



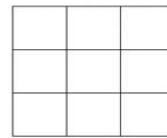
Work out the area of the following rectangles:

1)



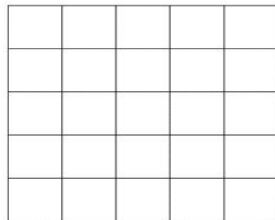
Area = _____ square cm

2)



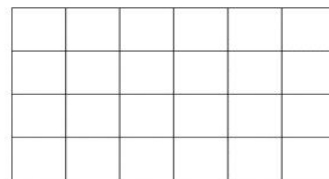
Area = _____ square cm

3)



Area = _____ square cm

4)



Area = _____ square cm

HINDI:

पत्र लेखन- (औपचारिक पत्र) - बीमारी के कारण 2 दिनों के अवकाश हेतु शाला प्रधान को प्रार्थना पत्र लिखिए।

UOI:

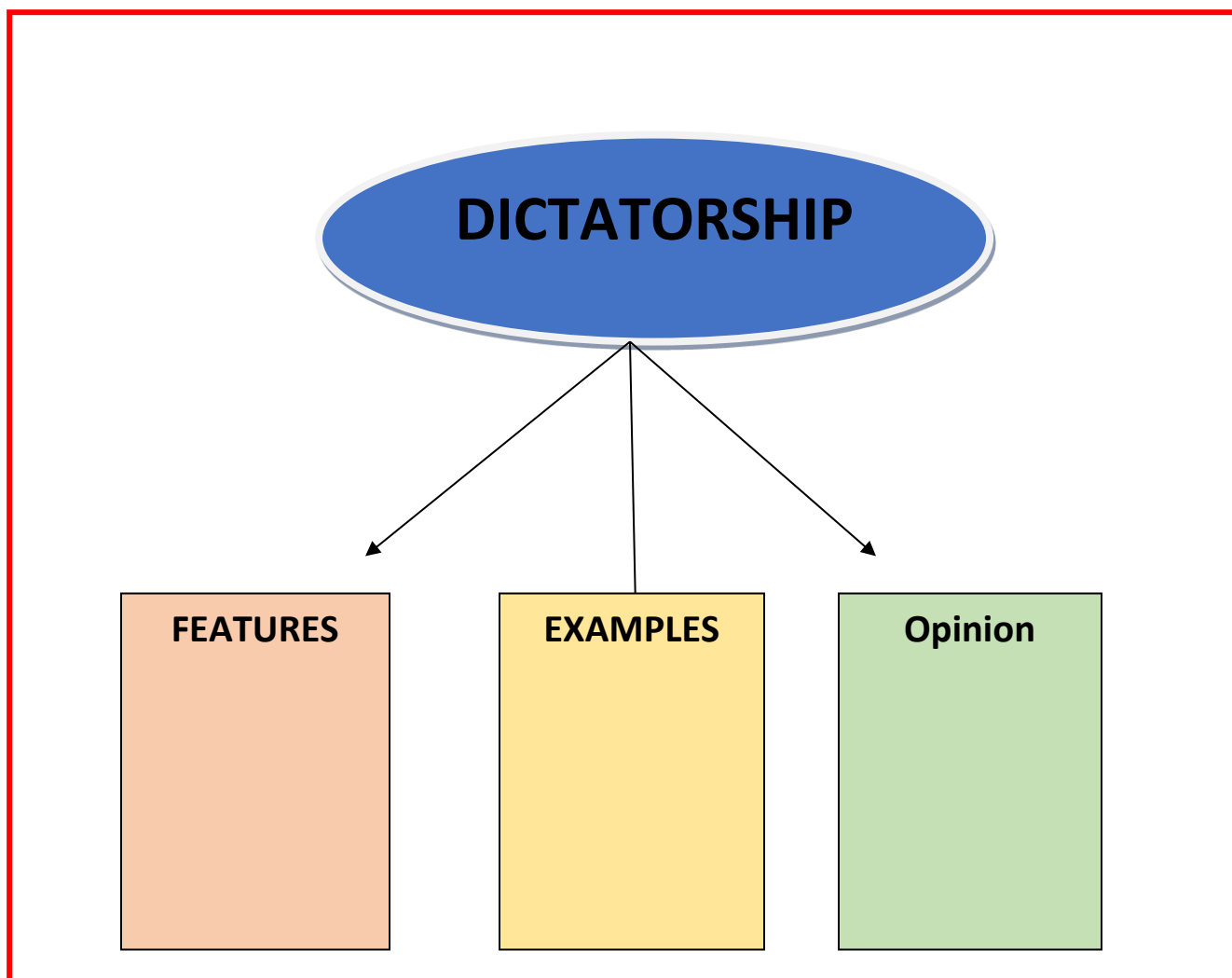
TASK: Watch the video and explore the key features of the **Dictatorship form of government**, and present your understanding using the graphic organizer given below.

Video Link: https://youtu.be/Dtjdm1zwL_k

Reading Material Link:

<https://drive.google.com/file/d/1Lly4uY5X1OoVlAnQHiIwNrFZGCMxMPrd/view?usp=sharing>

DETAILS ORGANIZER



ARTS:

Cotton Buds Impression Activity – Dip the cotton buds into different water colors and complete the picture on **page 11** in Craft book.

DANCE:

Watch and learn **Rajasthani Dance part-2**

Video Link-<https://youtu.be/5oBsoHKEgmo>